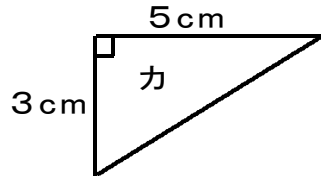
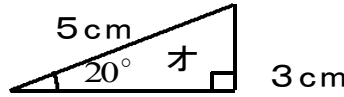
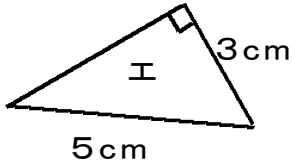
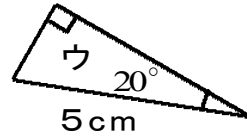
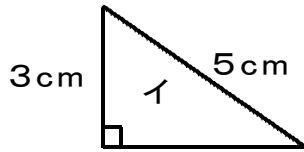
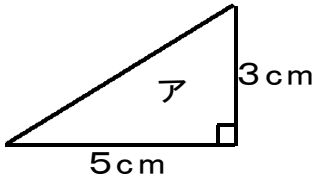


### 3. 課題プリント

【課題】 次の三角形を、合同三角形の組に分けなさい。また、合同になる理由をいなさい。



• \_\_\_\_\_ と

• \_\_\_\_\_ と

• \_\_\_\_\_ と