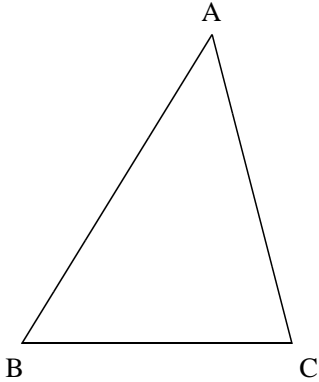


8 線分の比と平行線<特別編>

<課題1>

(証明)



.....


.....

.....



① だから

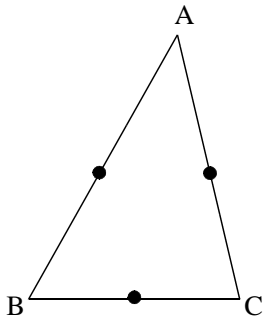
② だから



.....

.....

<課題2>



.....

.....

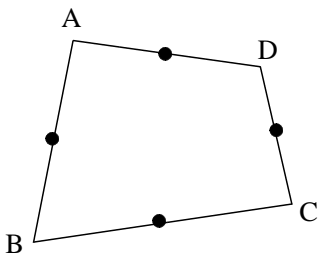
.....

.....

.....

.....

<課題3>



(証明)

.....

.....

.....

.....

.....

.....

.....

.....